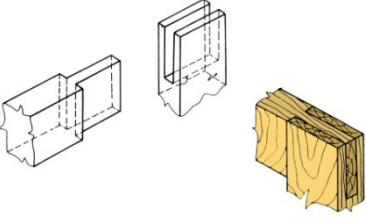
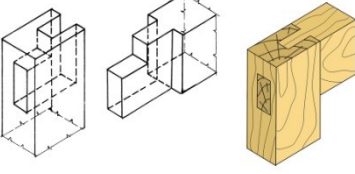
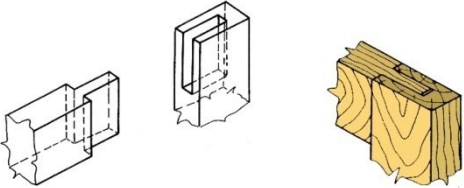
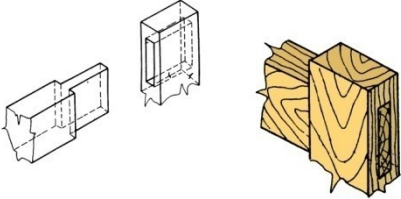
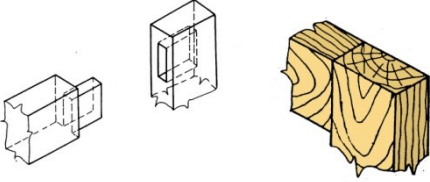
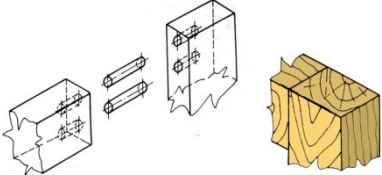
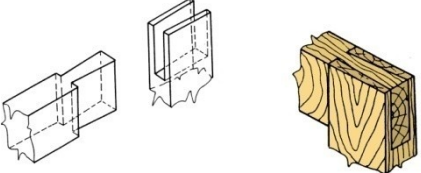
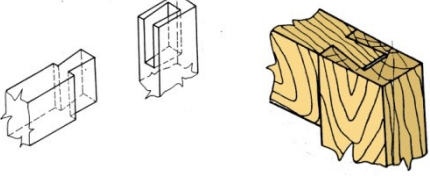


FIȘĂ DE LUCRU

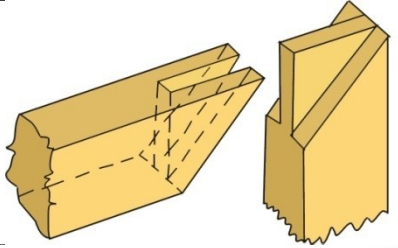
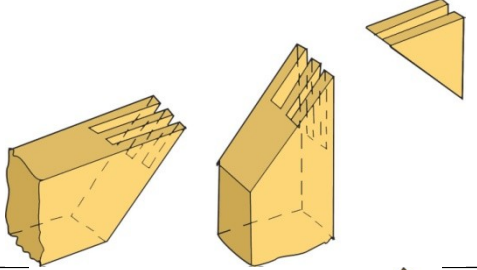
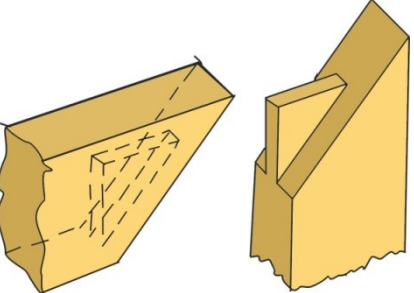
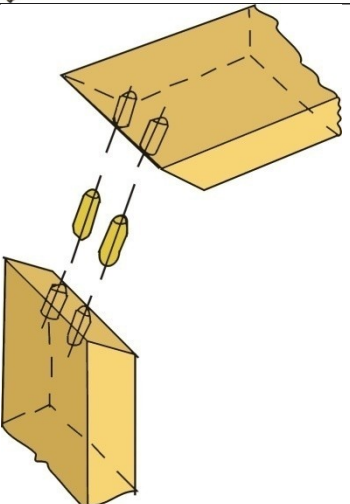
Analizați imaginile de mai jos.

Precizați tipul îmbinărilor

a) Îmbinări la

 <p>cu cep drept deschis</p>	 <p>cu cep drept cu umăr deschis</p>
 <p>cu cep drept semideschis</p>	 <p>cu cep drept străpuns</p>
 <p>cu cep drept cu umăr ascuns</p>	 <p>î cu cepuri rotunde aplicate</p>
 <p>cu cep coadă de rândunică deschis</p>	 <p>cu cep coadă de rândunică semideschis</p>

c) Îmbinări la

Schița îmbinării	Denumirea îmbinării
	<p>cu cep deschis</p>
	<p>cu cepuri deschise aplicate</p>
	<p>cu cep ascuns</p>
	<p>cu cepuri rotunde aplicate</p>

2. Alegeți o îmbinare din categoria a) și una din categoria b) și precizați elementele care se vor cota.

3. Realizați o îmbinare în plan respectând vederea din față, de sus și laterală